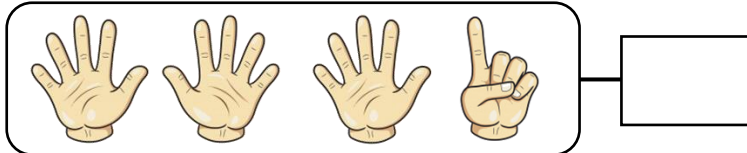


NOME: _____

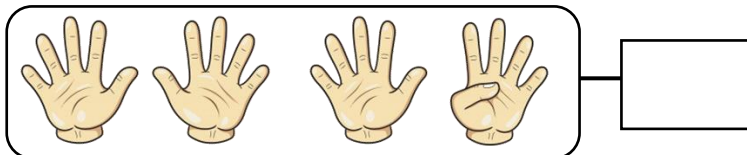
QUANTOS DEDOS ESTÃO APARECENDO EM CADA QUADRINHO? REGISTRE E LIGUE O NUMERAL ATÉ A QUANTIDADE DE DEZENAS E UNIDADES QUE ELE POSSUI:



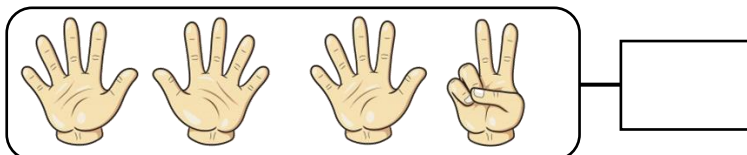
1 DEZENA E
3 UNIDADES




1 DEZENA E
4 UNIDADES



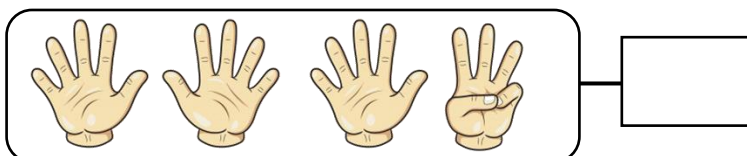
1 DEZENA E
9 UNIDADES




1 DEZENA E
2 UNIDADES



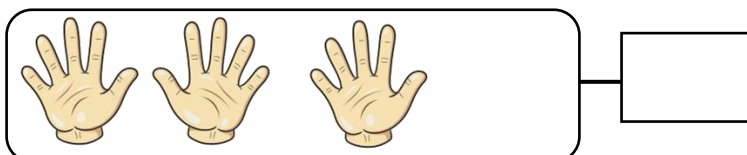
1 DEZENA E
7 UNIDADES




1 DEZENA E
1 UNIDADE



1 DEZENA E
6 UNIDADES



1 DEZENA E
8 UNIDADES



1 DEZENA E
5 UNIDADES